

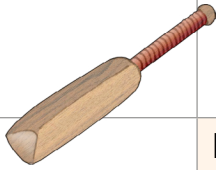



Addition word problems

<p>1. The toy factory made 319 trikes last year. This year they have made 254. How many trikes has the toy factory made altogether?</p>	<p>Number sentence</p>
<p>Part-part-whole</p>  	<p>Drawings</p>
<p>Jottings</p>	
<p>2. Jessica went to the shops twice this week to buy groceries. The first time she spent \$278. The second time she spent \$253. How much did Jessica spend on groceries altogether?</p>	<p>Number sentence</p>
<p>Part-part-whole</p>  	<p>Drawings</p>
<p>Jottings</p>	

<p>3. While on a driving holiday, Belinda and Jake travelled 682 kilometres in the first week. On the second week they only travelled 215 kilometres. How far did Belinda and Jake travel in total on their driving holiday?</p>	<p>Number sentence</p>
<p>Part-part-whole</p>  	<p>Drawings</p>
<p>Jottings</p>	
<p>4. Blake's cricket team scored 179 in their first innings and 335 in their second innings. How many runs did they score in total?</p>	<p>Number sentence</p>
<p>Part-part-whole</p>  	<p>Drawings</p>
<p>Jottings</p>	